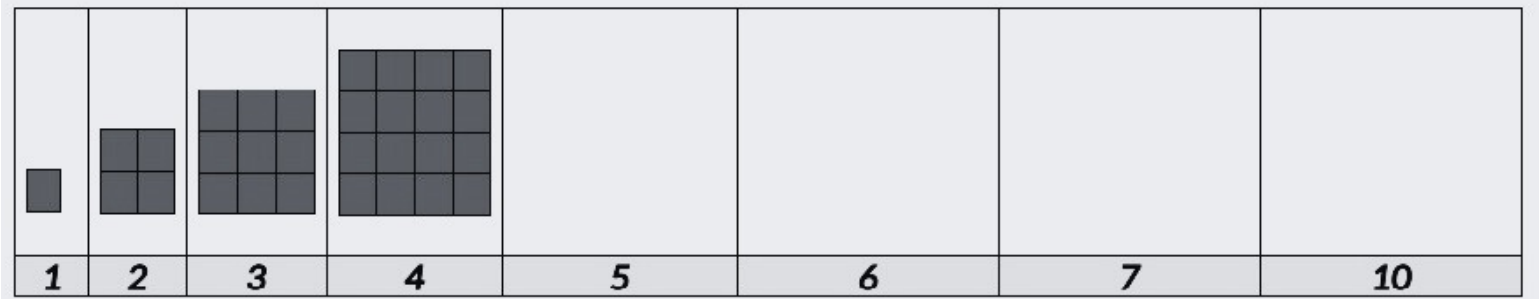


Imprimible: jugando a generalizar e identificar patrones

1) Completar las siguientes secuencias graficando.

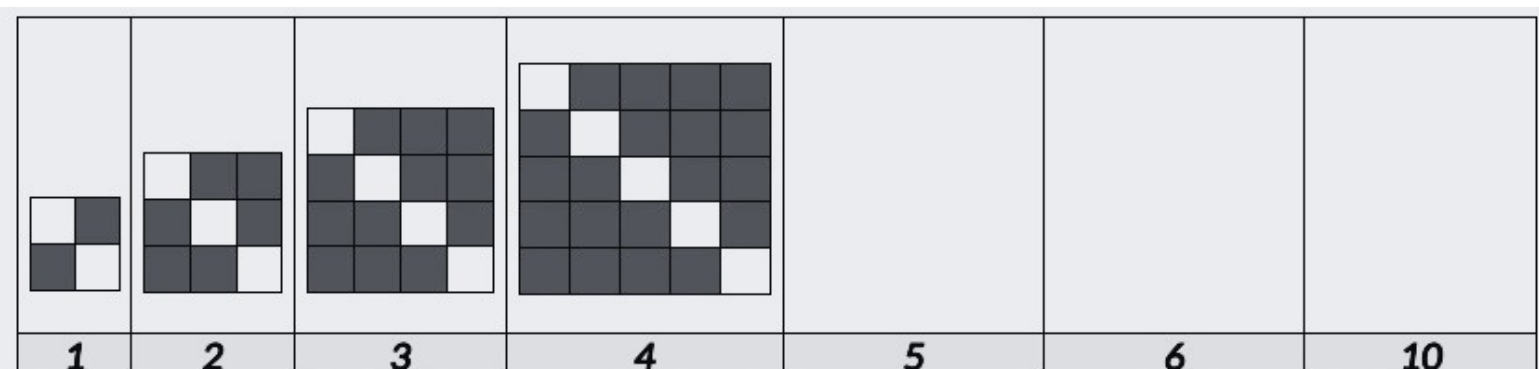
a) Cantidad de cuadritos pintados



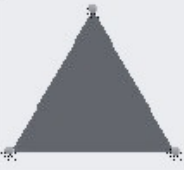



b) Cantidad de cuadritos pintados




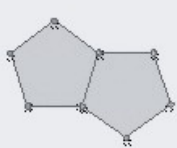
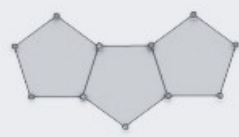
c) Cantidad de cuadritos pintados




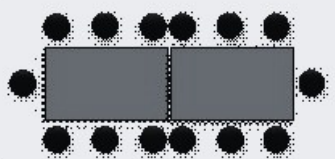
d) Cantidad de diagonales

						
1	2	3	4	5	6	9









e) Cantidad de pentágonos

					
1	2	3	4	5	8

f) Cantidad de sillas, si se van colocando mesas encadenadas.

				
1	2	3	4	7

g) Qué figura corresponde

											
1	2	3	4	5	6	7	8	9	10	18	96

2) Completar las siguientes secuencias numéricas y escribir su forma general para cada caso

a)

2	4	8	16	32	64
1	2	3	4	5	6	7	8	20	n

b)

6	11	16	21	26	31
1	2	3	4	5	6	7	8	20	n

c)

1	4	9	16	25	36
1	2	3	4	5	6	7	8	20	n

d)

2	5	10	17	26	37
1	2	3	4	5	6	7	8	20	n